

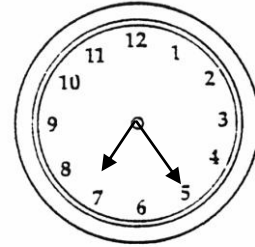



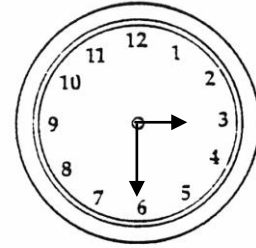



¿Qué Hora Es?

1. Contesta con frases completas. ¿Qué hora es en cada reloj?



2. Contesta con frases completas:

- a. 12:15 + diez minutos:

- b. 3:00 – quince minutos:

- c. 6:25 + cincuenta minutos:

- d. 8:20 + cuarenta y cinco minutos:

- e. 2:10 – trece minutos:

- f. 6:04 – once minutos:

- g. 4:50 + veintiseis minutos:

- h. 10:33 + sesenta minutos:

- i. 7:07 – treinta y dos:

- j. 8:00 + cincuenta y nueve minutos: